

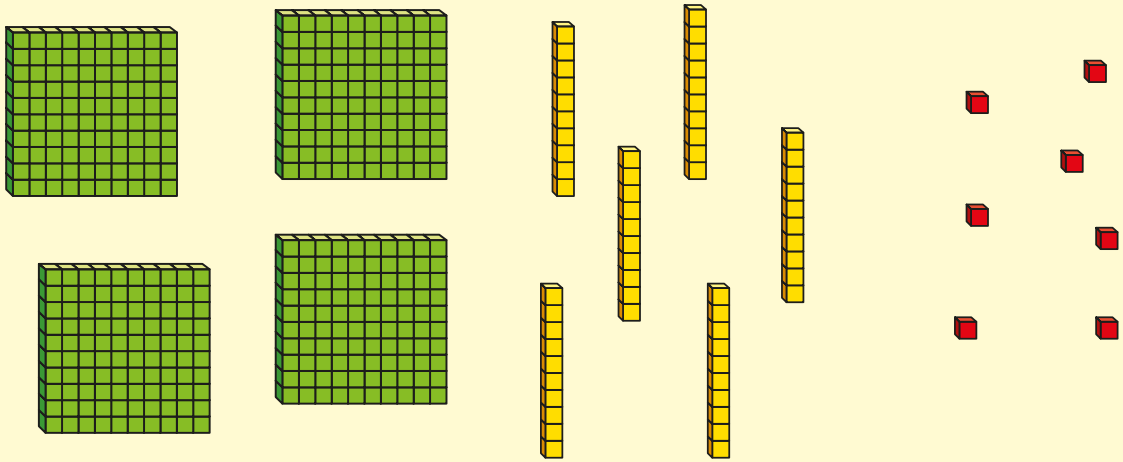
4

PLACE VALUE

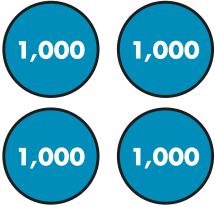


White
Rose
Maths



1 Circle 254

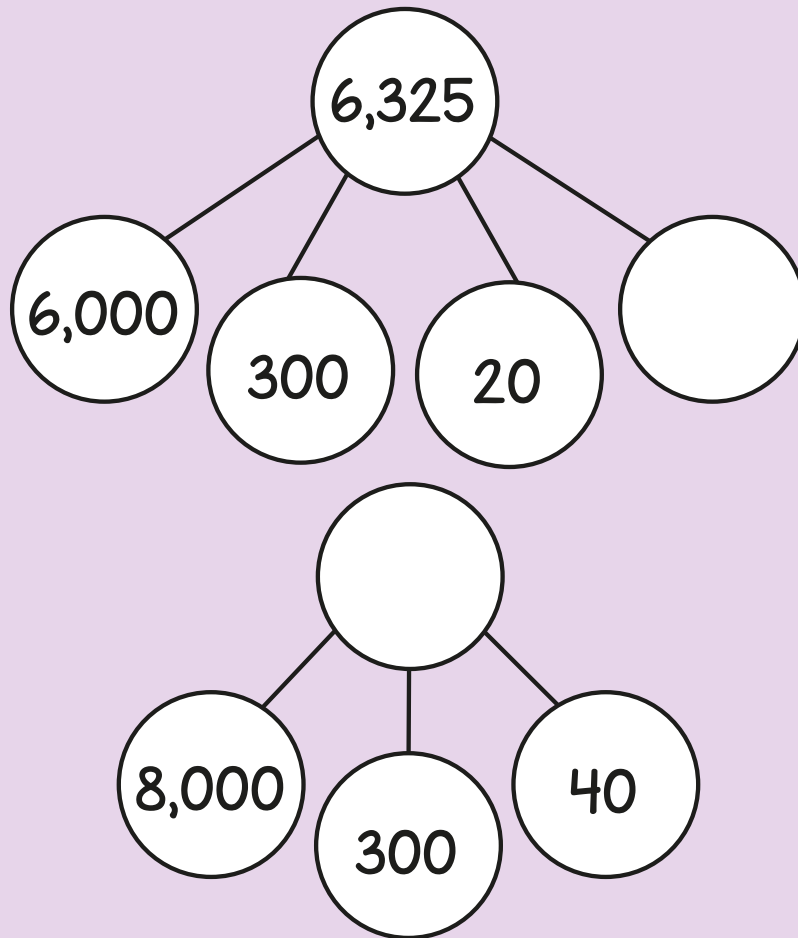


2 What number is shown on the place value chart?

Thousands	Hundreds	Tens	Ones
			

Draw more counters to make the number 4,057

- 3 Complete the part-whole models.



- 4 What number is the arrow pointing to?



Draw an arrow to the number 1,750

- 5 What is the value of the digit 6 in each of the numbers?

Match the numbers to the values.

296

6 thousands

6,123

6 hundreds

3,960

6 tens

641

6 ones

- 6 Use the digit cards to make an even number between 8,000 and 9,000

3

4

7

8


7 Fill in the missing numbers.

8,100		8,200	8,250	8,300		
-------	--	-------	-------	-------	--	--

8 Whitney makes a 4-digit number.

The hundreds digit is a 5

The tens digit is one more than the thousands digit.



The sum of all the digits is 8

What number has Whitney made?



Circle the calculation that is equal to 2,031

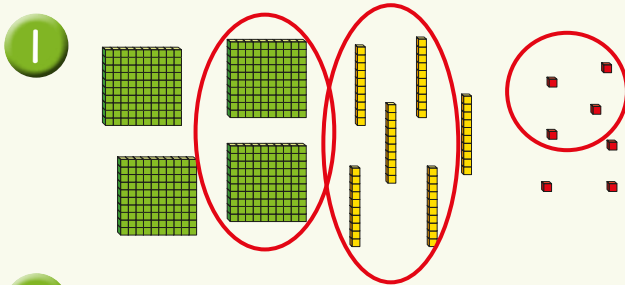
$$20 + 31$$

$$20 + 30 + 1$$

$$2,000 + 300 + 1$$

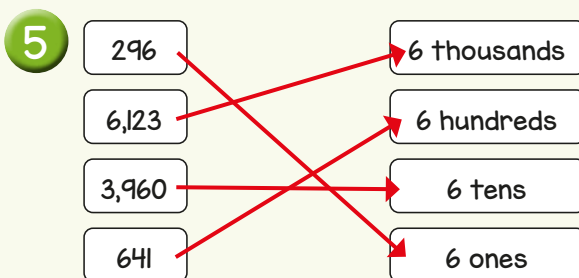
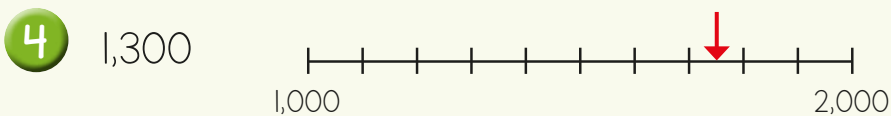
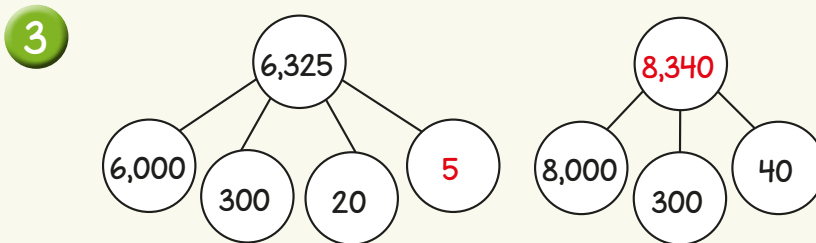
$$2,000 + 30 + 1$$

Answers



2 4,016

Thousands	Hundreds	Tens	Ones



6 8,374 or 8,734

7

8,100	8,150	8,200	8,250	8,300	8,350	8,400
-------	-------	-------	-------	-------	-------	-------

8 1,520

9 $2,000 + 30 + 1$